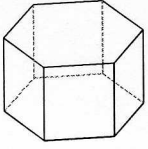


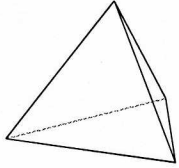
13-1 Identifying Solid Figures (ver1)_hw

Name each figure.

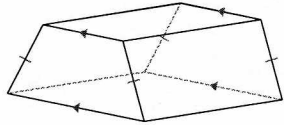
1)



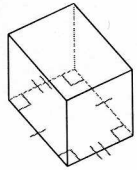
3)



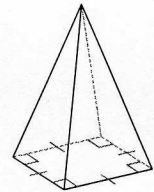
5)



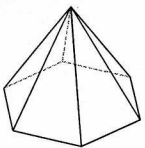
7)



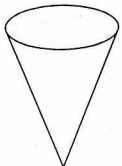
9)



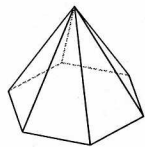
11)



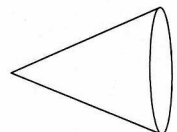
13)



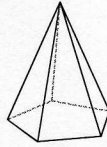
15)



17)



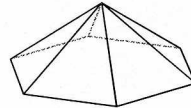
2)



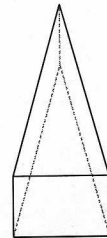
4)



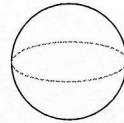
6)



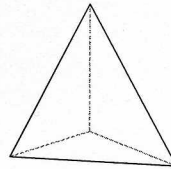
8)



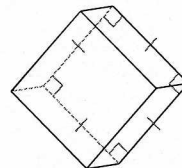
10)



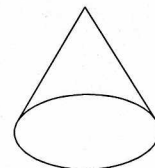
12)



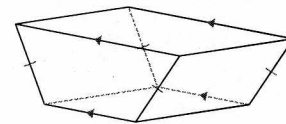
14)

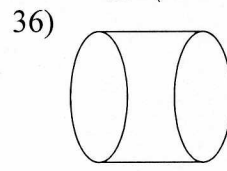
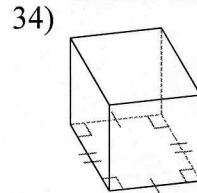
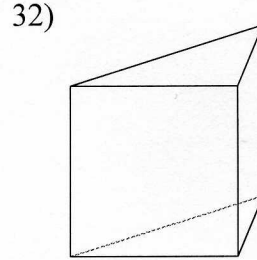
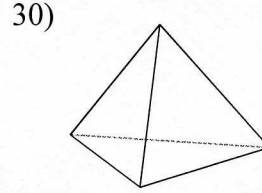
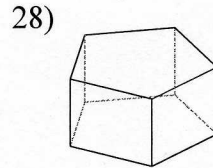
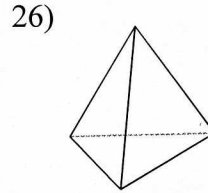
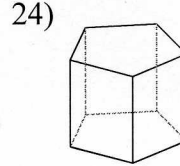
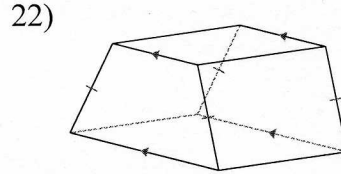
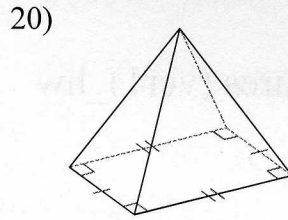
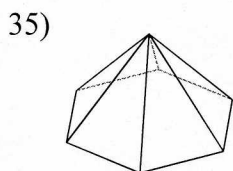
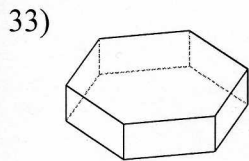
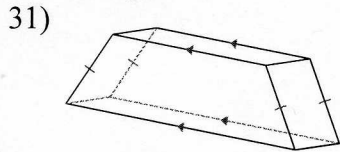
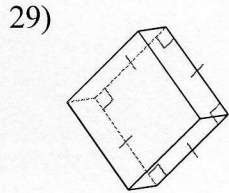
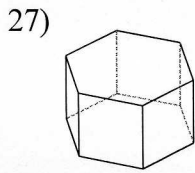
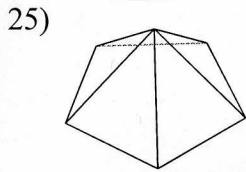
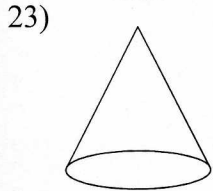
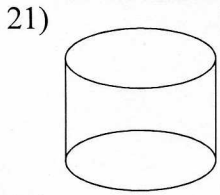
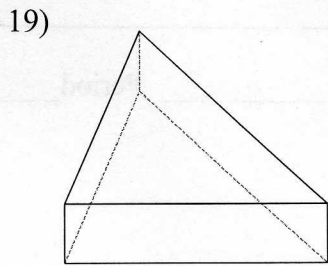


16)



18)





Answers to 13-1 Identifying Solid Figures (ver1)_hw

- | | | | |
|------------------------|------------------------|-----------------------|-------------------------|
| 1) hexagonal prism | 2) pentagonal pyramid | 3) triangular pyramid | 4) cylinder |
| 5) trapezoidal prism | 6) hexagonal pyramid | 7) rectangular prism | 8) triangular prism |
| 9) square pyramid | 10) sphere | 11) hexagonal pyramid | 12) triangular pyramid |
| 13) cone | 14) square prism | 15) hexagonal pyramid | 16) cone |
| 17) cone | 18) trapezoidal prism | 19) triangular prism | 20) rectangular pyramid |
| 21) cylinder | 22) trapezoidal prism | 23) cone | 24) pentagonal prism |
| 25) pentagonal pyramid | 26) triangular pyramid | 27) hexagonal prism | 28) pentagonal prism |
| 29) square prism | 30) triangular pyramid | 31) trapezoidal prism | 32) triangular prism |
| 33) hexagonal prism | 34) rectangular prism | 35) hexagonal pyramid | 36) cylinder |